

Name _____

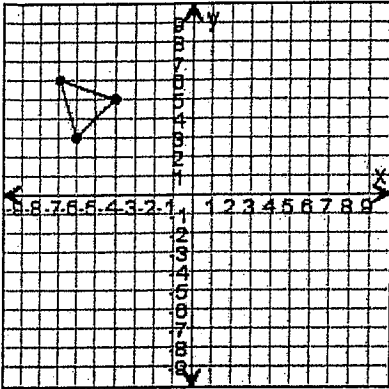
Date _____
(Answer ID # 0525074)

Transformations

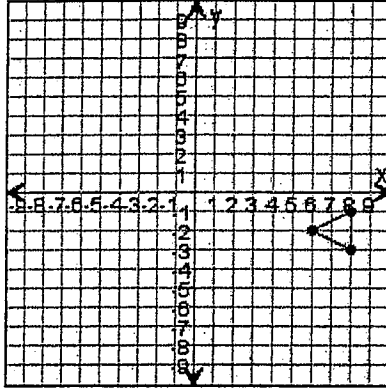
Day 2

Draw the triangle after the transformations.

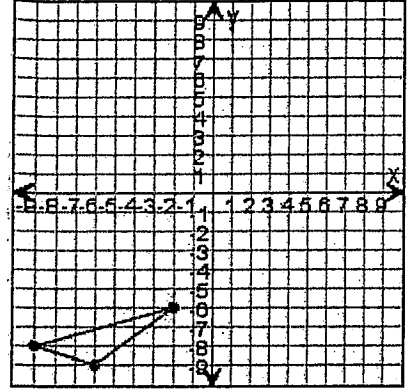
1. Translate the triangle down 6 units, then 1 unit left.



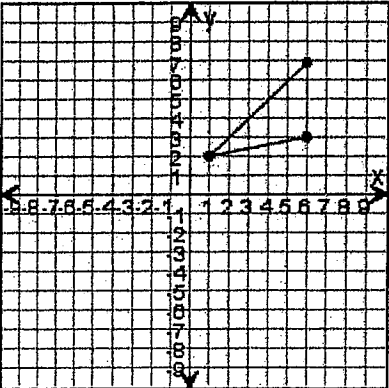
2. Translate the triangle left 1 unit, then 6 units down.



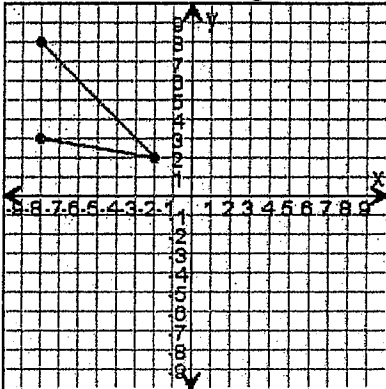
3. Translate the triangle up 7 units, then 3 units right.



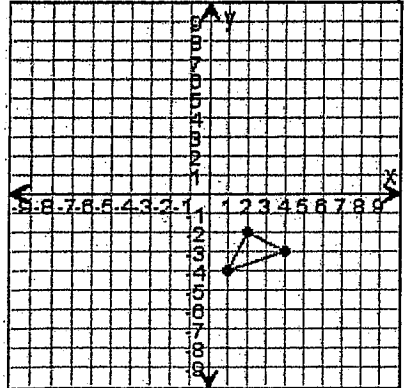
4. Translate the triangle down 2 units, then 2 units left.



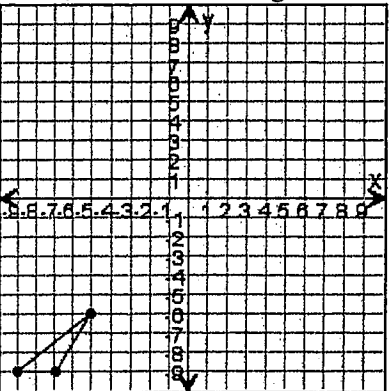
5. Translate the triangle 1 unit up.



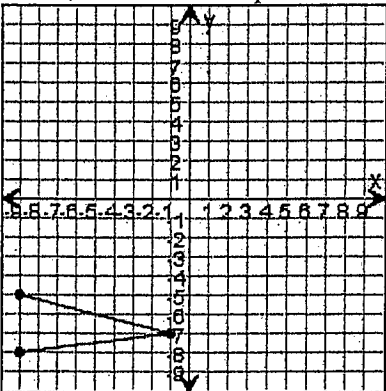
6. Translate the triangle left 9 units, then 6 units up.



7. Translate the triangle up 7 units, then 6 units right.



8. Translate the triangle right 6 units, then 1 unit up.



9. Translate the triangle down 2 units, then 4 units left.

